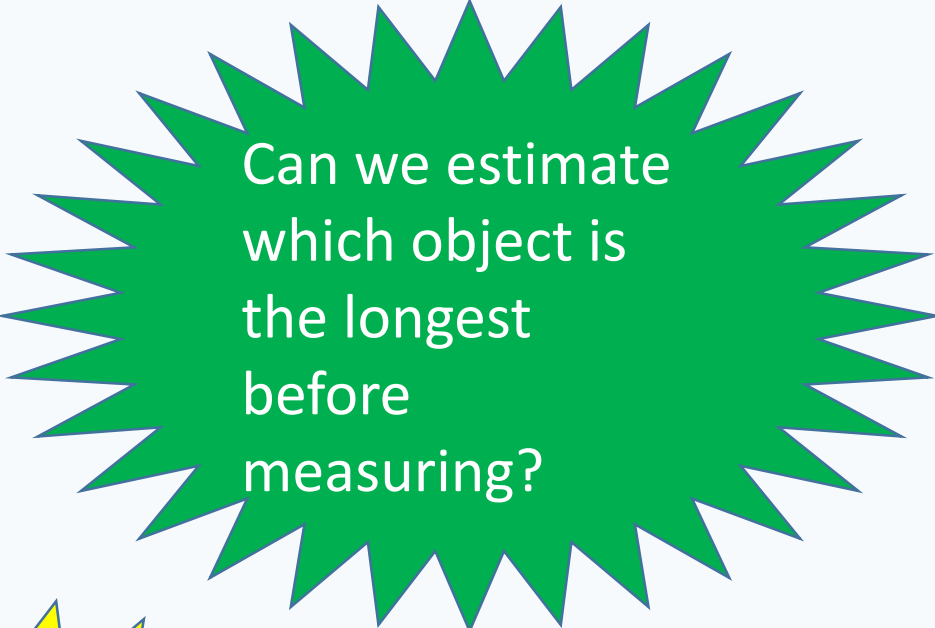


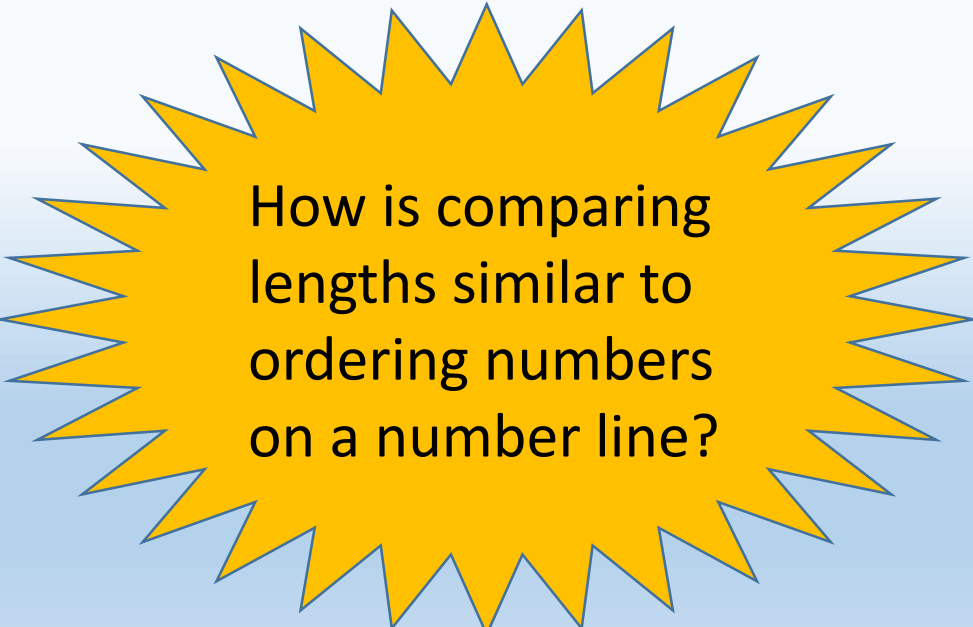
Thursday

02.04.20

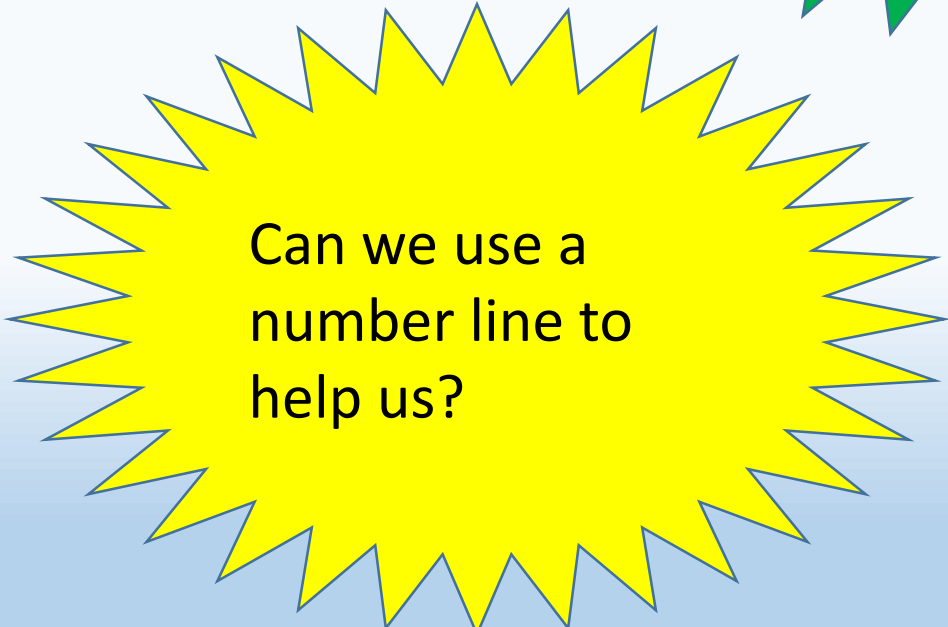
L.O. To order lengths



Can we estimate
which object is
the longest
before
measuring?



How is comparing
lengths similar to
ordering numbers
on a number line?




Can we use a
number line to
help us?

Go outside and collect 6 leaves

Leaf Length Ordering

Which leaf is the longest? Which leaf is the shortest? Measure them from stem to tip.



Annie, Jack and Claire are comparing the length of ribbons.
Complete the sentences.



has the longest ribbon.

has the shortest ribbon.

cm < cm < cm

Choose five objects in your home.
Order the objects from longest to shortest.
Write at least three sentences to describe the objects
using the words **longer**, **longest**, **shorter** and **shortest**.



A family are measuring their heights.

- Lucy is taller than Katie, but not as tall as Tim.
- Gary is taller than Tim.

Write down their names in order of their heights, starting with the shortest.

Extra challenge

There are 3 teddies in a box.

The brown teddy is 15 cm taller than the yellow teddy.

The yellow teddy is 3 cm shorter than the pink teddy.

The pink teddy is 42 cm tall.

How tall are the brown and yellow teddies?



Here is a strip of purple paper.



A blue strip is four times longer than a purple strip.



The strips are joined end to end.



50 *cm*

How long is the purple strip?

How long is the blue strip?